


# Practice questions


Achieved?





1 Write these analogue times in two different ways. The first one is done for you.





quarter to 11  
10:45












2 Match the times that are the same by drawing a line.

4:10 a.m.                      20 past 10

5:45 p.m.                      10 to 4

10:20 a.m.                      10 past 4

3:50 p.m.                      quarter to 6

3 Circle the time above you are mostly likely to be asleep.