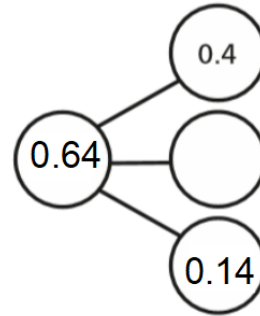
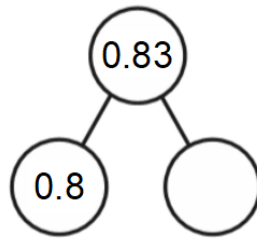
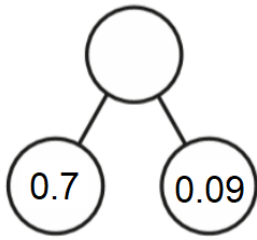


## Catch up task for decimals numbers - 22.5.20

Complete the part - whole models



Write < or > to compare the decimals.

a) 

○	Tths	Hths
2	7	1

 ○ 

○	Tths	Hths
2	1	7

b) 

○	Tths	Hths
4	0	6

 ○ 

○	Tths	Hths
4	6	0

Write the numbers in descending order.

6.38

8.36

3.68

6.83

---