


Time

To achieve 100 you need to:

- ★ read, write and convert time between analogue (including clock faces using Roman numerals) and digital 12- and 24-hour clocks
- ★ use a.m. and p.m. where necessary.

Draw lines to match these times.

- | | |
|-------|------------------------|
| noon | 25 to 8 in the evening |
| 17:35 | 12 p.m. |
| 19:25 | 7:25 p.m. |
| | 5:35 p.m. |



(2 marks)

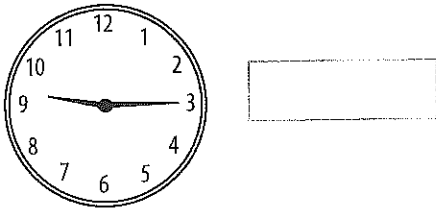
Order the following times from **earliest** to **latest**. Write the letters of each clock in the boxes.

A p.m.	B 	C a.m.	D
----------------------	--------------	----------------------	--------------

(1 mark)

earliest latest

Write the time that is 75 minutes **earlier** than the one shown here.



(1 mark)

Write the time that is **halfway** between 10:20 a.m. and 13:10

(1 mark)

Top tip

- Think about the number of minutes in an hour.

/5

Total for this page

Time problems

To achieve 100 you need to:

- ★ calculate the duration of an event using appropriate units of time.

- 1 A film starts at 9:40 p.m. and ends at 11:25 p.m.

How long does it last?

(1 mark)

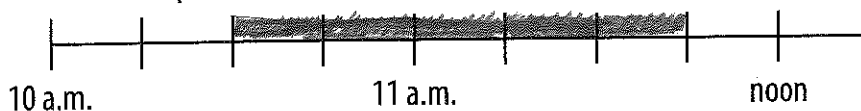
- 2 Pete's art lesson ends at 14:45

It lasts for 55 minutes.

What time does it start?

(1 mark)

- 3 The shaded part of the scale shows the length of time that Mr Brown parked his car in the car park.



- a) What time did he arrive at the car park?

(1 mark)

- b) The cost of parking a car here is 35p for 15 minutes.

How much did it cost Mr Brown to park his car? £

(1 mark)

- 4 This timetable shows the times that buses stop at different places in the town.

Bus garage	10:18	11:18	12:18
Post Office	10:46	11:46	12:46
Station	11:15	12:15	13:15
School	12:08	13:08	14:08

- a) How long does it take for the bus to travel from the **bus garage** to the **school**?

(1 mark)

- b) Mrs Lang arrives at the Post Office bus stop at 11:55

How long must she wait for the next bus?

(1 mark)

- c) Jasper wants to get the 13:15 bus from the station.

He gets to the station bus stop 18 minutes early.

What time does he get to the station bus stop?

(1 mark)

Top tip

- Remember to check any scales first.

Total for this page