


**Set:** Wednesday 7<sup>th</sup> March **Due in:** Tuesday 13<sup>th</sup> March

## Mrs Guy's group

This week we have been revisiting multiplication and division

To support our learning this week, we would like the children to complete the following activities  
Your child will also have a list of topics that they wish to revise using the Rising Stars revision guide. Our rock star times tables focus for next week will be the 6, 7 and 9 times tables.

- 1 Mrs Jones has £20 to spend on presents.  
She buys 4 mugs and 3 teddy bears.  
What is the greatest number of key-rings she can buy?



- 2 Lollies are sold in two sizes, small and large.  
Sanjay buys two small lollies for 92p  
Jenny buys 5 small lollies and 3 large lollies and pays with a £10 note.  
Jenny receives £4.16 change.  
How much does one large lolly cost?



- 1 Here is part of a multiplication grid.

×	4	5	6	7	8	9
4		20				
5	20					
6						
7						
8						
9						

Shade in any other squares that have the same answer as the shaded square.

2



- Sally multiplies a number by 100  
Her answer has three digits.  
The hundreds and ones digit are the same.  
The sum of the digits is 10  
What number could Sally have started with?  
Are there any others?

Parent feedback

1 One egg and one slice of toast costs £1.94



Three eggs and two slices of toast costs £5



How much does one slice of toast cost?

2 These three chicks lay some eggs.



Kelsey

Beth

Caroline

Beth lays twice as many as Kelsey.

Caroline lays 4 more than Beth.

They lay 44 eggs in total.

How many eggs does Caroline lay?


1 Beans can be bought in single tins or as a multipack of 4 tins.



Ben buys 10 single tins.

John buys 2 multipacks and 2 single tins.

I paid £1.24 less than Ben.



John


How much does a multipack of beans cost?

2 Cola is sold in bottles and cans.



Yasmin buys 5 cans and 3 bottles.

She sells the cola in glasses.



She sells all of the cola.

How much profit does she make?