


Addition and subtraction (Easier)

Remember to show your column method clearly on the squares.


Choose the method from the example that you feel most comfortable with:

3	1	4	H	T	O
+	2	6			
3	4	0			
			3	4	0


$$\begin{array}{r} 124 \\ + 63 \\ \hline \end{array}$$




$$\begin{array}{r} 253 \\ + 144 \\ \hline \end{array}$$




$$\begin{array}{r} 345 \\ + 39 \\ \hline \end{array}$$




$$\begin{array}{r} 208 \\ + 52 \\ \hline \end{array}$$




$$\begin{array}{r} 375 \\ - 53 \\ \hline \end{array}$$




$$\begin{array}{r} 484 \\ - 63 \\ \hline \end{array}$$



$$\begin{array}{r} 596 \\ - 251 \\ \hline \end{array}$$



$$\begin{array}{r} 671 \\ - 36 \\ \hline \end{array}$$



Now check your answers with the answer sheet.