


Addition and subtraction (Harder)


Remember to show your column method clearly on the squares, **including** where you exchange:

3	1	4
+	2	6
<hr/>		
3	4	0


491 + 195




517 + 338




784 + 269




472 + 397



562 - 218




608 - 352




Calculate using Mental method.

702 - 443



500 - 336  
Best method?  
Show me!



Complete the missing digits.

	3	8	9
+			6
<hr/>			
		8	5

Rosie wants to work out  $102 - 98$  in her head.  
Explain a method that Rosie could use.

Now check your answers with the answer sheet.