


Addition and subtraction (Easier)

Remember to show your column method clearly on the squares.


Choose the method from the example that you feel most comfortable with:

3	1	4		H	T	O
+	2	6		□		⊙
3	4	0			⊙	
				3	4	0

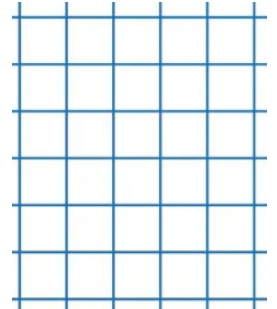
$$\begin{array}{r} 234 \\ + 15 \\ \hline \end{array}$$




$$\begin{array}{r} 328 \\ + 51 \\ \hline \end{array}$$




$$\begin{array}{r} 615 \\ + 38 \\ \hline \end{array}$$




$$\begin{array}{r} 241 \\ + 32 \\ \hline \end{array}$$




$$\begin{array}{r} 431 \\ - 21 \\ \hline \end{array}$$




$$\begin{array}{r} 485 \\ - 34 \\ \hline \end{array}$$



$$\begin{array}{r} 875 \\ - 62 \\ \hline \end{array}$$



$$\begin{array}{r} 472 \\ - 67 \\ \hline \end{array}$$



Now check your answers with the answer sheet.